


# Rank 1 Ball Flight

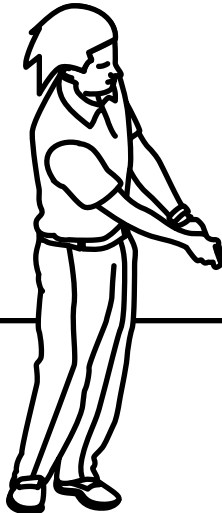


Circle the golfer that almost hit Carol with their swing!




The three suspects are on the right. Which golfer swings high enough to hit my head with a wood? I need to tell them to be more careful!


Carol



A. Eric

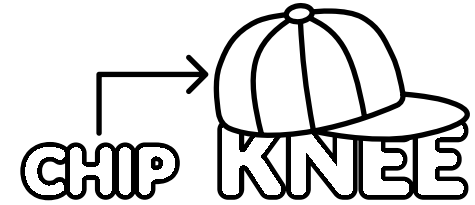


B. Clyde



C. Terry

Write the message hidden in each visual word puzzle!  
Hint: Each one describes the position of your clubhead in one of the three swing types.



1. \_\_\_\_\_

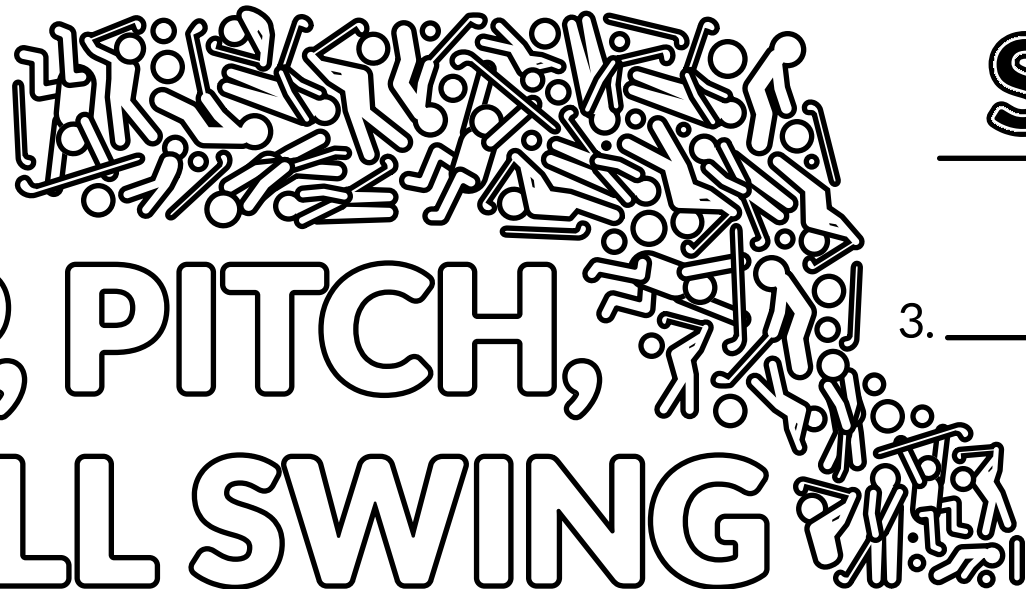


2. \_\_\_\_\_

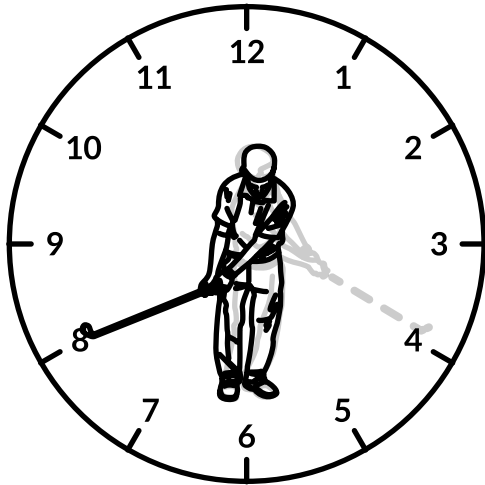


3. \_\_\_\_\_

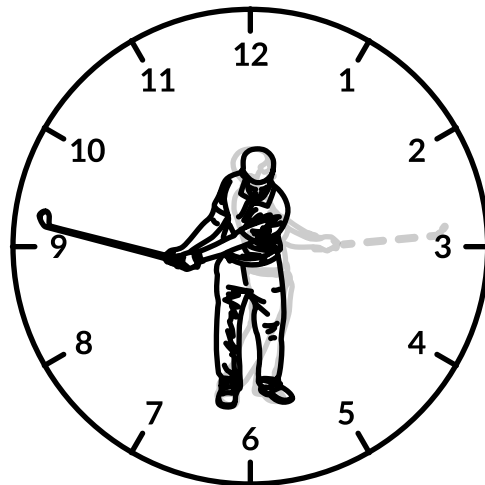
Find this golfer in the crowd on the right!



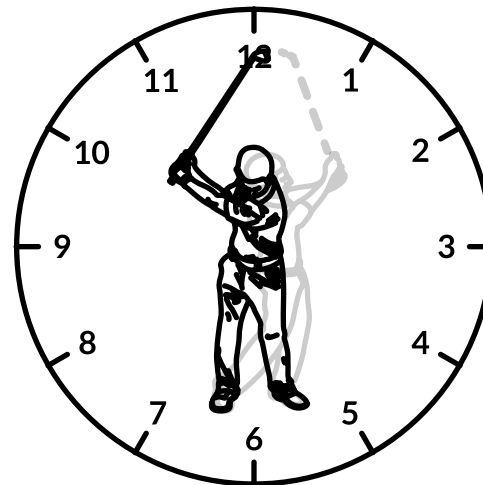
# CHIP, PITCH, & FULL SWING





Chip Shot



Pitch Shot



Full Swing



Cut out the 48 square puzzle pieces on the third page.

Then put them together in the correct order and color the finished picture!

**Solve this crossword puzzle!**

**DOWN**

1. Type of club used for chipping and pitching.
2. This type of shot goes the shortest distance.
3. You usually use a chip shot around this area of a golf course.
4. This type of club hits shorter distances than woods and is the most common club type.
5. Distance-wise, this type of shot is between a chip and full swing.
7. A chip shot rolls more than it is in the \_\_\_\_\_.
9. You can use a pitch shot to hit over this type of hazard.

**ACROSS**

6. This club hits the farthest.
8. The longer your golf swing, the farther your hitting \_\_\_\_\_ will be.
10. A pitch shot will \_\_\_\_\_ less than it is in the air.
11. This type of shot goes the farthest.
12. Family of clubs the driver belongs to.





OPERATIO

Copyright © 2021

N 36® GOLF

© Operation 36, LLC.